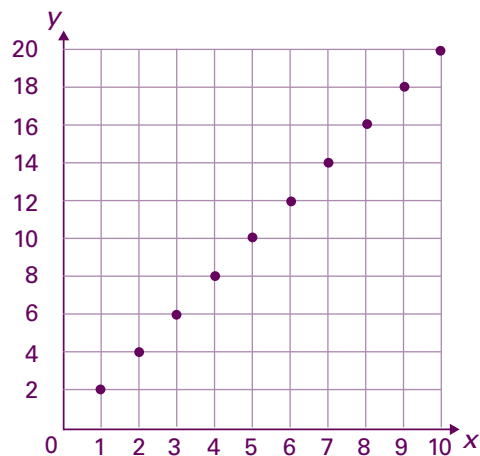


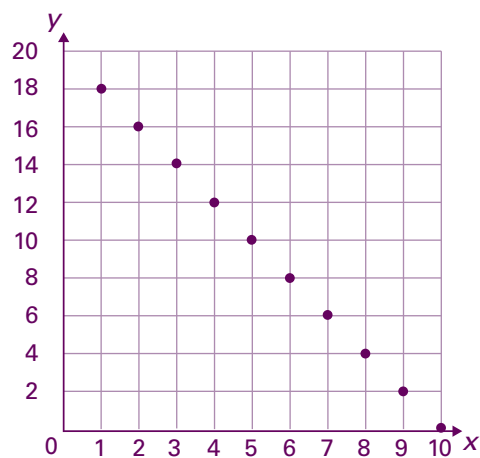
## Activité 5

### Associations

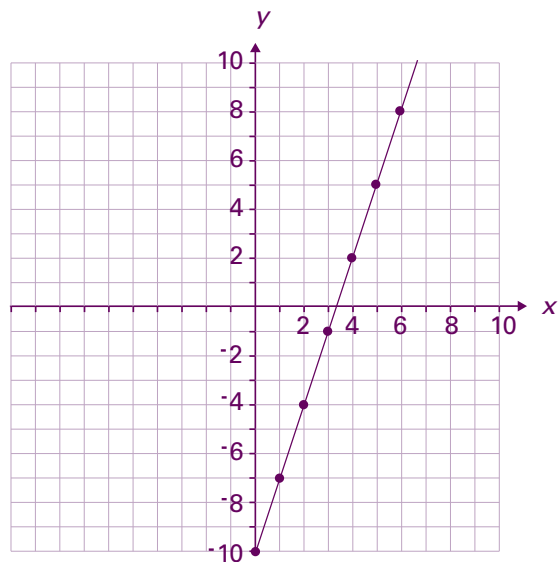
$x$	$y$
1	2
2	
3	6
4	8
5	



$x$	$y$
1	18
2	
3	14
4	12
5	

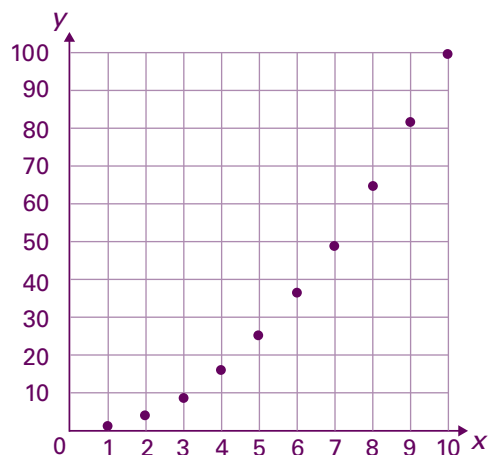


$x$	$y$
0	-10
1	
2	-4
3	-1
4	

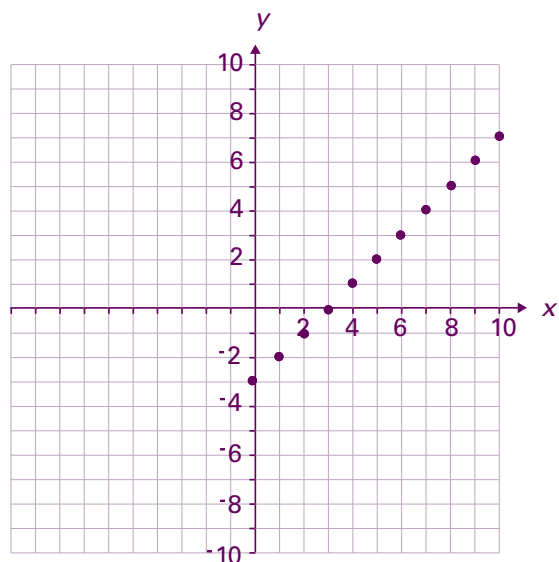


# Activité 5

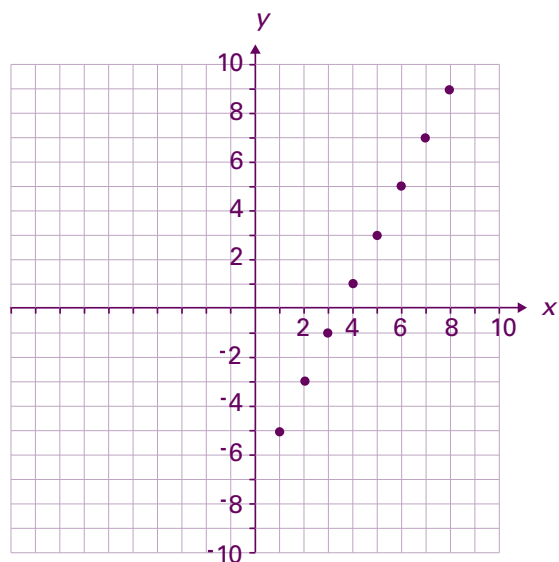
x	y
1	1
2	
3	9
4	16
5	



x	y
0	-3
1	
2	-1
3	0
4	



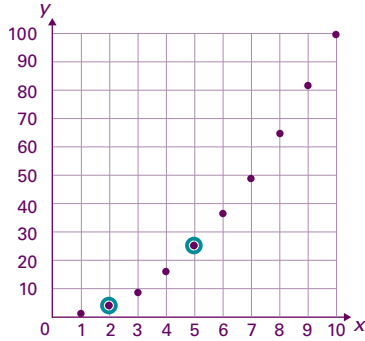
x	y
1	-25
2	
3	-5
4	5
5	



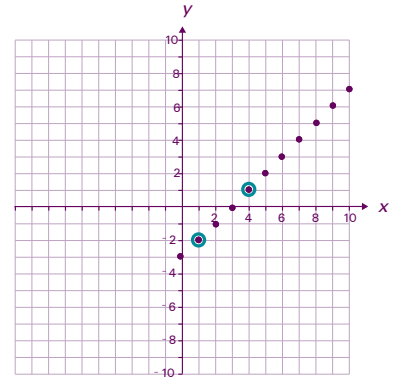
# Activité 5

## Associations – Corrigé

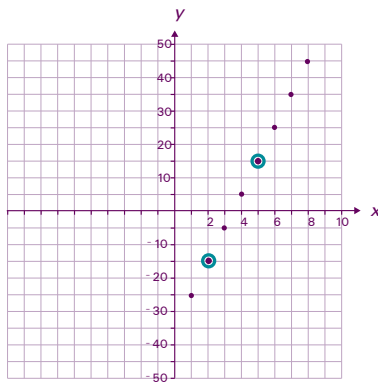
x	y
1	1
2	4
3	6
4	16
5	25



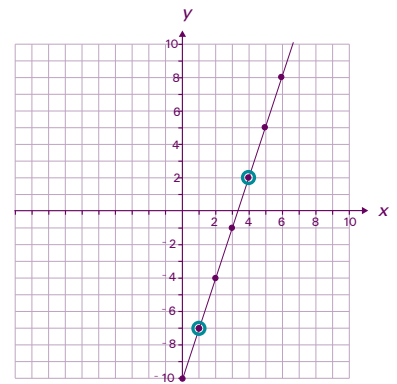
x	y
0	-3
1	-2
2	-1
3	0
4	1



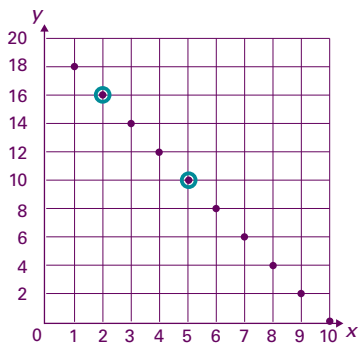
x	y
1	-25
2	-15
3	-5
4	5
5	15



x	y
0	-10
1	-7
2	-4
3	-1
4	2



x	y
1	18
2	16
3	14
4	12
5	10



x	y
1	2
2	4
3	6
4	8
5	10

