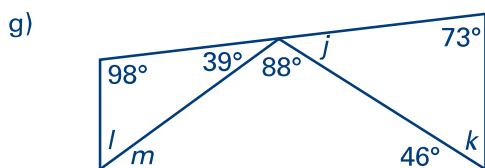
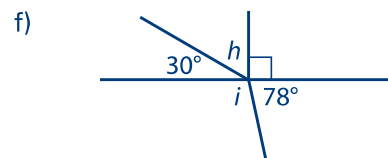
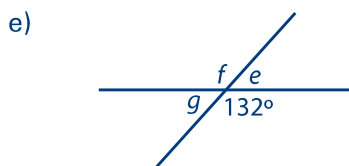
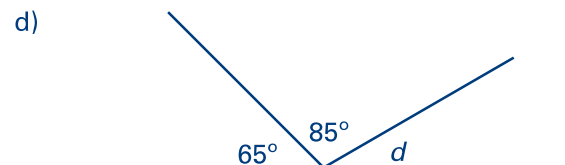
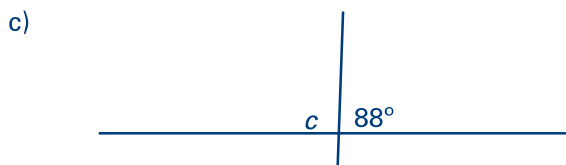
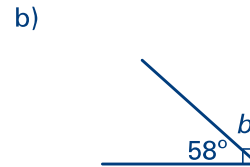
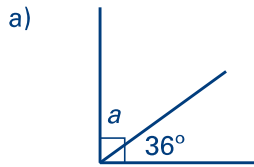


Des angles à découvrir

1. Écris la mesure des angles indiqués par chaque lettre sans utiliser de rapporteur. Laisse des traces de ta démarche.



2. Crée une figure dans laquelle il y a des mesures d'angles manquantes que l'on peut déduire.