


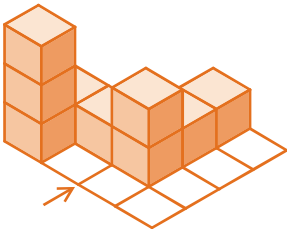
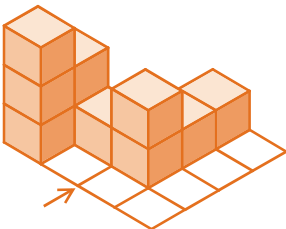
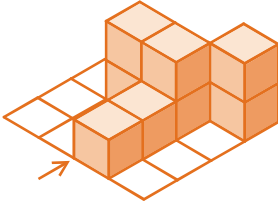
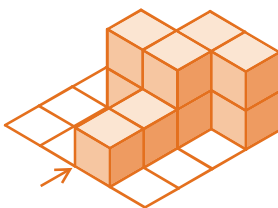
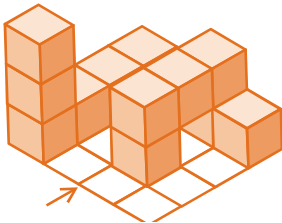


C'est du solide – Corrigé

Dans chaque cas, construis un solide qui correspond aux trois vues données.

Solide A	Solide B	Solide C
<p>Solide A</p> 	<p>Solide B</p> 	<p>Solide C</p> 
Solide D	Solide E	Solide F
<p>Solide D</p>  <p>ou</p> 	<p>Solide E</p>  <p>ou</p> 	<p>Solide F</p>  <p>ou</p> 